




FIG. 1 Areas in which Jurassic sediments are known to occur.



Figure 2.

- 
 Shales, sandstones and conglomerates
 (numbers indicate Jurassic fossil localities)
- 
 Massive limestone
- 
 Metavolcanics and subordinate shales and sandstones