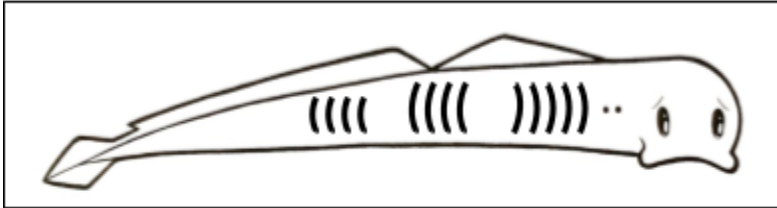


Name: \_\_\_\_\_

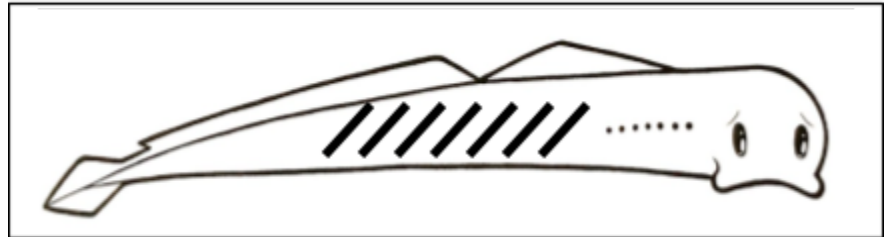
### How Many Bones?

Directions: Look at each of the eel from the story The Salmon and the Eel and determine how many bones are in each eel.

1. How many bones: \_\_\_\_\_



2. How many bones: \_\_\_\_\_

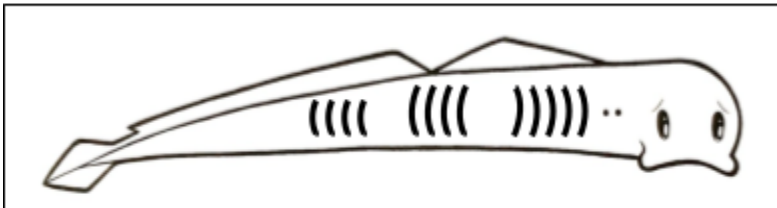


Name: \_\_\_\_\_

### How Many Bones?

Directions: Look at each of the eel from the story The Salmon and the Eel and determine how many bones are in each eel.

1. How many bones: \_\_\_\_\_



2. How many bones: \_\_\_\_\_

